



# SEŠTEVANJE IN ODŠTEVANJE DO 10

KOLIKO JE VSEH PREDMETOV SKUPAJ?

RAČUN: \_\_\_\_\_

DORIŠI. KOLIKO JE VSEH?


DODAJ 4 	<input type="text"/>
DODAJ 2 	<input type="text"/>

IZRAČUNAJ.


$6+2=$  \_\_\_     
  $5+4=$  \_\_\_     
  $1+7=$  \_\_\_     
  $8+2=$  \_\_\_

$4+5=$  \_\_\_     
  $3+2=$  \_\_\_     
  $1+6=$  \_\_\_     
  $5+2=$  \_\_\_


$4+3=$  \_\_\_     
  $0+5=$  \_\_\_     
  $2+7=$  \_\_\_     
  $2+1=$  \_\_\_

2	7	3	0	6	4	5	1
<div style="border: 1px solid black; padding: 5px; display: inline-block;">+3</div> 							


NAPIŠI RAČUN ALI NARIŠI.




$$5 - 2 = 3$$



$$\boxed{\phantom{000}}$$



$$\boxed{\phantom{000}}$$



$$\boxed{\phantom{000}}$$

$$8 - 6 =$$

$$10 - 2 =$$

$$7 - 5 =$$

$$6 - 3 =$$

IZRAČUNAJ.

$6 + 3 = \underline{\quad}$

$8 + 2 = \underline{\quad}$

$6 - 5 = \underline{\quad}$

$9 - 9 = \underline{\quad}$

$2 - 0 = \underline{\quad}$

$1 + 6 = \underline{\quad}$

$5 + 0 = \underline{\quad}$

$3 + 1 = \underline{\quad}$

$7 - 2 = \underline{\quad}$

$2 + 6 = \underline{\quad}$

